

Adı :
Soyadı:

2. Sınıf Matematik

Çıkarma İşlemi Sonucu Tahmin Etme-2

Çıkarma işlemlerinin sonucunu en yakın onluğa yuvarlayarak tahmin ediniz.

$$66 - 42$$

$$70 - 40$$

30

$$\begin{array}{r} 66 \\ - 42 \\ \hline 24 \end{array}$$

$$81 - 23$$

$$..... -$$

.....

$$\begin{array}{r} \\ - \\ \hline \end{array}$$

$$74 - 38$$

$$..... -$$

.....

$$\begin{array}{r} \\ - \\ \hline \end{array}$$

$$42 - 13$$

$$..... -$$

.....

$$\begin{array}{r} \\ - \\ \hline \end{array}$$

$$83 - 37$$

$$..... -$$

.....

$$\begin{array}{r} \\ - \\ \hline \end{array}$$

$$92 - 51$$

$$..... -$$

.....

$$\begin{array}{r} \\ - \\ \hline \end{array}$$

$$78 - 22$$

$$..... -$$

.....

$$\begin{array}{r} \\ - \\ \hline \end{array}$$

$$84 - 52$$

$$..... -$$

.....

$$\begin{array}{r} \\ - \\ \hline \end{array}$$

$$75 - 41$$

$$..... -$$

.....

$$\begin{array}{r} \\ - \\ \hline \end{array}$$

$$85 - 32$$

$$..... -$$

.....

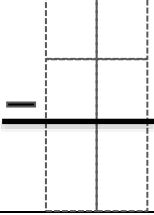
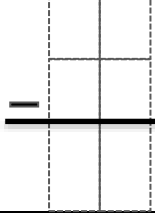
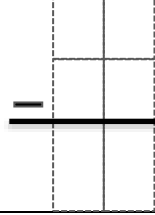
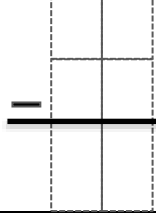
$$\begin{array}{r} \\ - \\ \hline \end{array}$$

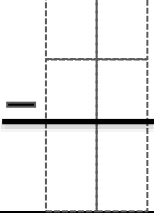
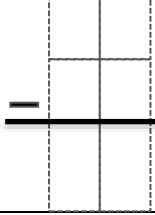
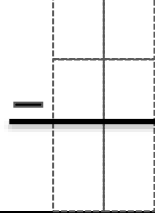
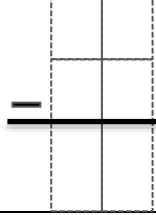
Adı :
Soyadı:

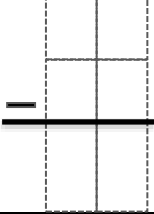
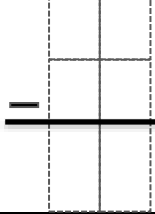
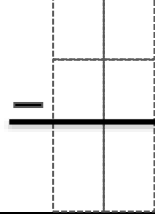
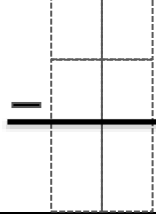
2. Sınıf
Matematik

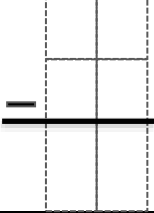
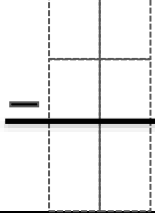
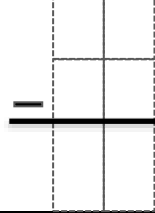
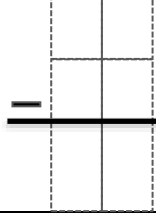
Çıkarma İşlemi
Sonucu Tahmin Etme-2

Çıkarma işlemlerinin sonucunu en yakın onluğa yuvarlayarak tahmin ediniz.

İşlem	Tahmini Sonuç	Gerçek Sonuç	Karşılaştırma
			

İşlem	Tahmini Sonuç	Gerçek Sonuç	Karşılaştırma
			

İşlem	Tahmini Sonuç	Gerçek Sonuç	Karşılaştırma
			

İşlem	Tahmini Sonuç	Gerçek Sonuç	Karşılaştırma
			

İşlem	Tahmini Sonuç	Gerçek Sonuç	Karşılaştırma
